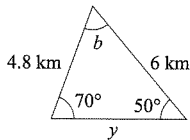
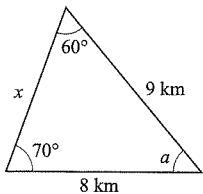
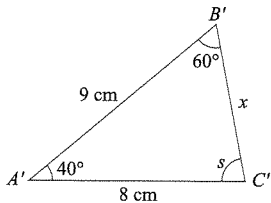
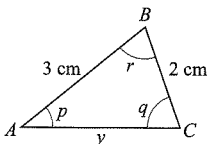


9. Find the scale factor and the missing measurements in the similar triangles in each part. (The sketches are not drawn to scale.)

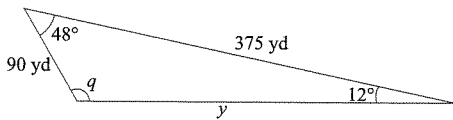
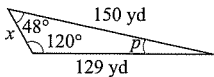
a.



b.



c.



d. (Be careful!)

